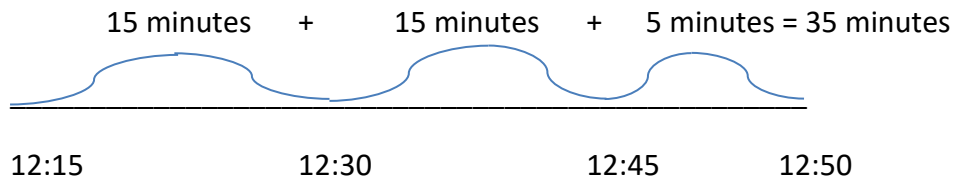


Solving time problems – a hint sheet

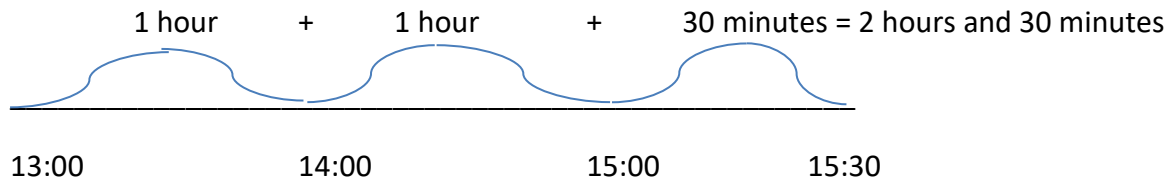
Q) When solving problems that use time the best way is to use a timeline.

Jan a cake in the oven at 12:15. It cooked for 35 minutes. When did she take it out of the oven?



A) Jan took the cake out of the oven at 12:50.

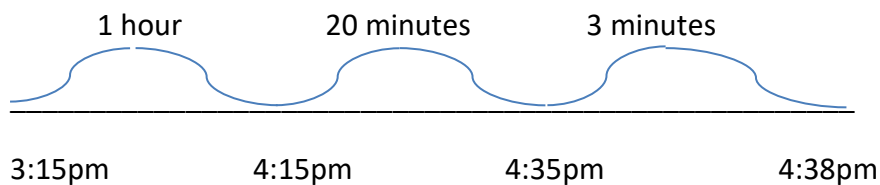
Q) How long is it between 13:00 and 15:30?



A) 2 hours and 30 minutes

Q) Tim gets home from school at 3:15pm. He does his homework for 47minutes and then has his dinner for 36 minutes. He is then allowed to play on his Xbox. What time can he start to play?

$47 + 36 = 83$ minutes which can be converted into 1 hour and 23 minutes



A) He can start to play at 4:38pm.