

Year 5

Mathematics

Arithmetic: Test 9

Name	
Date	



32

total marks

1

$562 + 100 =$



1 mark

2

$815 - 30 =$



1 mark

3

$98 \div 7 =$



1 mark



Total for this page

7

$5298 - 672 =$



1 mark

8

$9 \times 11 =$




1 mark

9


$8 \times 5 \times 3 =$



1 mark

Total for
this page

19 $720 \div 8 =$




1 mark

20 $7.8 \times 100 =$




1 mark

21 $\frac{3}{10} + \frac{4}{5} =$



1 mark




Total for
this page

25

$$506 \times 12 =$$

A large grid area for working out the multiplication. A small empty rectangular box is provided for the final answer.



2 marks

26

$$3434 \times 35 =$$

A large grid area for working out the multiplication. A small empty rectangular box is provided for the final answer.



2 marks



Total for
this page

Guidance: Children will have 30 minutes for this test.

question	answer	marks
1	662	1
2	785	1
3	14	1
4	$\frac{6}{9}$ or $\frac{2}{3}$	1
5	$\frac{7}{15}$	1
6	8382	1
7	4626	1
8	99	1
9	120	1
10	4884	1
11	5.2	1
12	4.2	1
13	36	1
14	47 016	1
15	25 000	1
16	306 467	1
17	121	1
18	5400	1
19	90	1
20	780	1
21	$1\frac{1}{10}$	1

question	answer	marks
22	$\frac{2}{9}$	1
23	$5\frac{1}{4}$	1
24	8.49	1
25	6072	2
26	120 190	2
27	79	2
28	819	2
		Total 32